

# AN ROINN OIDEACHAIS

(Department of Education).

LEAVING CERTIFICATE EXAMINATION, 1955.

ART AND DRAWING.

MECHANICAL DRAWING AND DESIGN.

HONOURS

FRIDAY, 17th JUNE.—MORNING, 10 TO 12.

INSTRUCTIONS.

- (a) Candidates may take Section I or Section II but *not both*.
- (b) The use of drawing instruments is allowed.
- (c) The number of the question must be distinctly marked by the side of the answer.
- (d) Questions marked (\*) have accompanying diagrams.
- (e) Colour **MUST** be used in Section I.

SECTION I.—[100 marks.]

ONE QUESTION ONLY TO BE ATTEMPTED.

1. Draw a design for a strip-poster, 8 inches by 20 inches (horizontal), to advertise *one* of the following:—

- (a) "A Concert," or
- (b) "Kitchen Furniture," or
- (c) "A Garage."

Scale:  $\frac{1}{2}$  full size.

Simple "one-stroke" lettering may be used to indicate the title or announcement.

Complete in colour as much as possible of the design.

2. Draw a design for a rectangular "Tray Cloth," 15 inches by 21 inches. The design should be suitable for Embroidery, or Weaving, or Block-printing.

Scale:  $\frac{1}{2}$  full size.

Complete in colour as much as possible of the design.

3. Make a design for a circular "Floor Rug," 40 inches in diameter, suitable for a room, the general colour scheme of which is Pale Grey, Green, Amber and Brown.

Scale:  $\frac{1}{4}$ th full size.

Complete in colour as much as possible of the design.

SECTION II.—[100 marks.]

THREE QUESTIONS ONLY TO BE ATTEMPTED.

[All questions carry equal marks.]

\*1. An ornamental border is shown on the diagram. Draw two repeats of the border according to the figured dimensions.

\*2. The diagram represents a Paper-knife. Draw the diagram full size to the dimensions given.

\*3. The plan, front and side elevations of a Grind-stone are shown in the diagram. Draw full size, a new elevation of the diagram on a vertical plane represented in plan by X'Y'.

4. Draw a design for a Poster or Showcard to advertise (a) "Tinned Fruits," or (b) "Soap Flakes," or (c) "Wooden Soldiers." The design is to be rectangular in shape, 6 inches by 8 inches (vertical). Simple "one-stroke" lettering may be used to indicate the title or announcement.

(Colour MAY be used in answering this question).


5. Draw a design for an octagonal Cushion, of 8 inches side. The design should be suitable for Embroidery, or Leathercraft, or Stencilling, or Cut-work, or Appliqué.

Any style of ornament may be used. Scale:  $\frac{1}{4}$  full size.

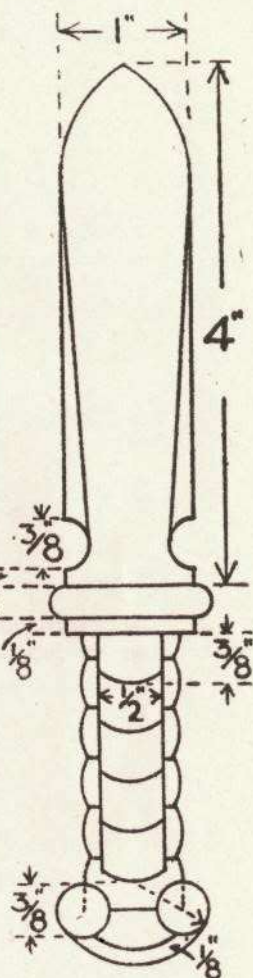
(Colour MAY be used in answering this question).

## ROINN II - ONÓRACA

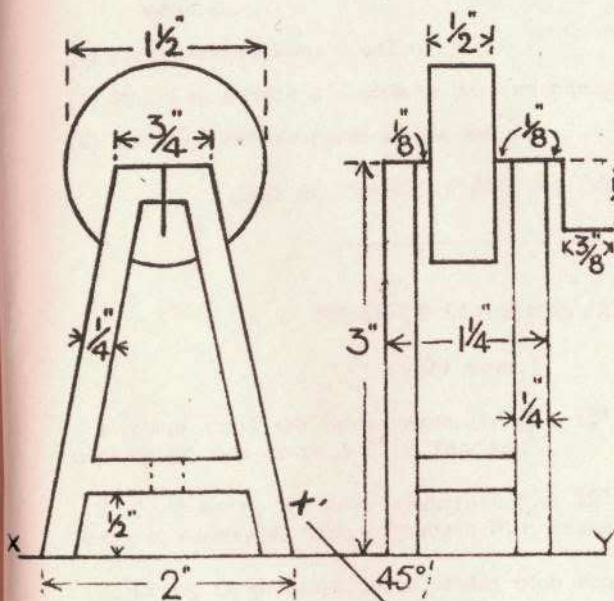
## SECTION II - HONOURS



Q. 1.



Q. 2.



Q. 3.

