



Coimisiún na Scrúduithe Stáit
State Examinations Commission

Junior Certificate Examination, 2014

Technical Graphics
Higher Level

Section B

(280 marks)

Monday, 16 June
Morning 9:30 - 12:30

Instructions

- (a) Any four questions to be answered.*
- (b) All questions in this section carry equal marks.*
- (c) The number of the question must be distinctly marked by the side of each answer.*
- (d) Work on **one side** of the paper only.*
- (e) Write your examination number on each sheet of paper used.*

SECTION B. Answer any **four** questions. All questions carry equal marks.

1. A pictorial view of part of a car dashboard is shown in **Fig.1**. An exploded 3D graphic is also shown.

- (a) Draw an elevation in the direction of arrow **A**.
- (b) Project a plan from the elevation.
- (c) Project an end view in the direction of arrow **B**.
- (d) Determine the true shape of the surface **S**.

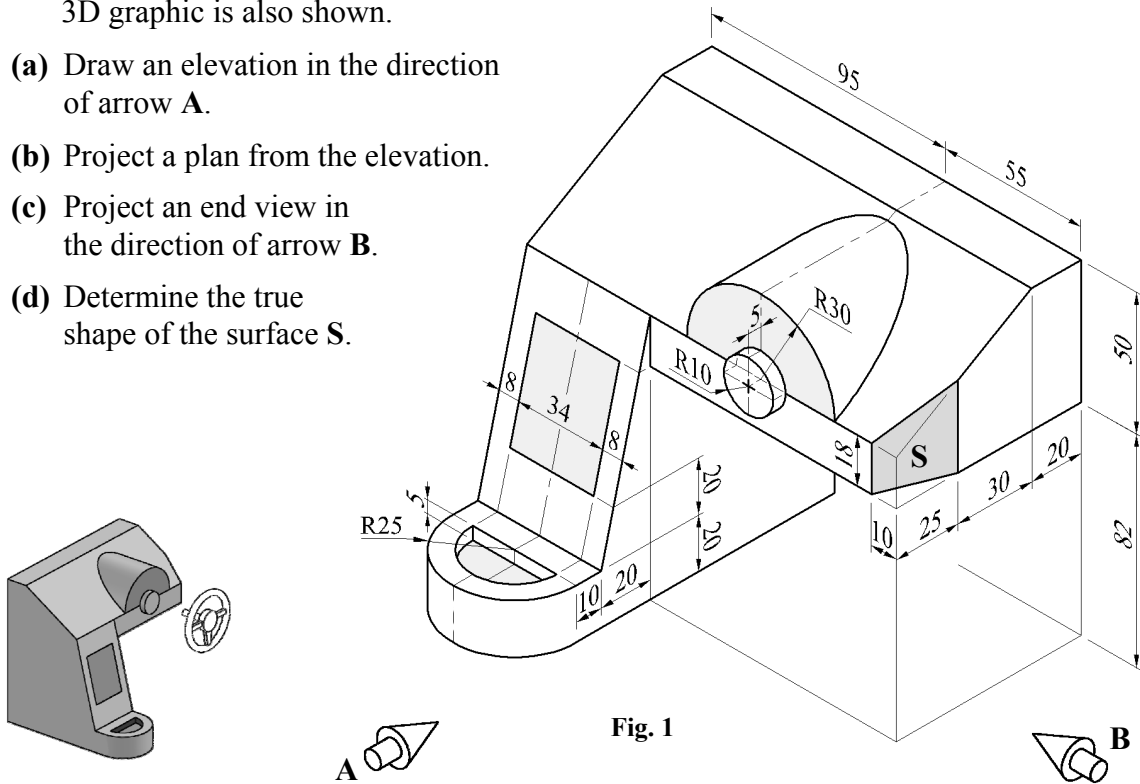
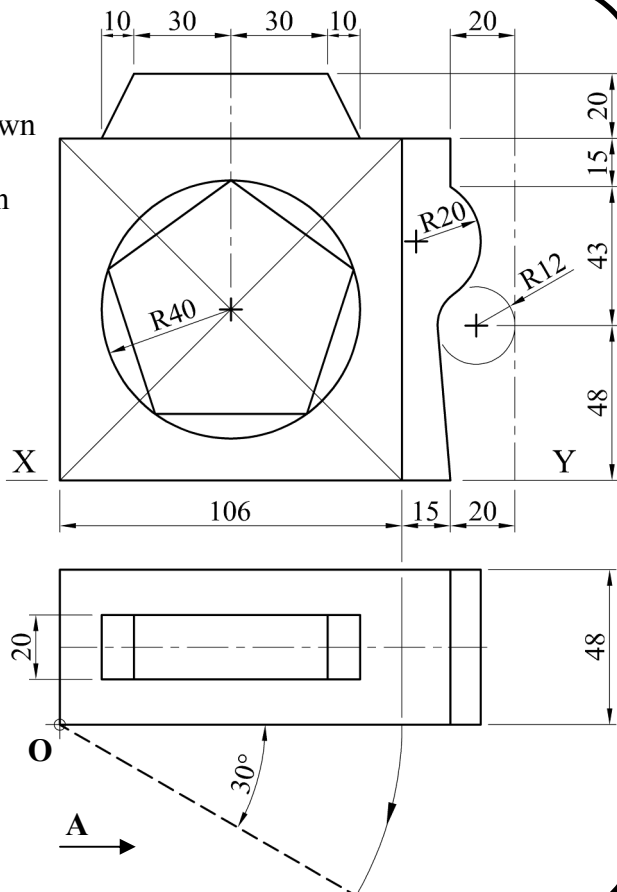



Fig. 1

2. The elevation and plan of a child's lunchbox are shown. The lunchbox accommodates a water bottle, as shown in the 3D graphic. The cover of the lunchbox includes a regular pentagon inscribed in a circle.

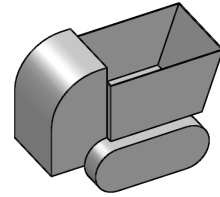
- (a) Draw the given elevation and plan.
The cover of the lunchbox is rotated through 30° about the point **O** as shown by the broken line in plan.
- (b) Project an end view of the lunchbox in the direction of arrow **A** to show the cover in the rotated position.



3. The axonometric axes required for the isometric projection of a toy truck are shown. The elevation, end view and a 3D graphic of the truck are also shown.

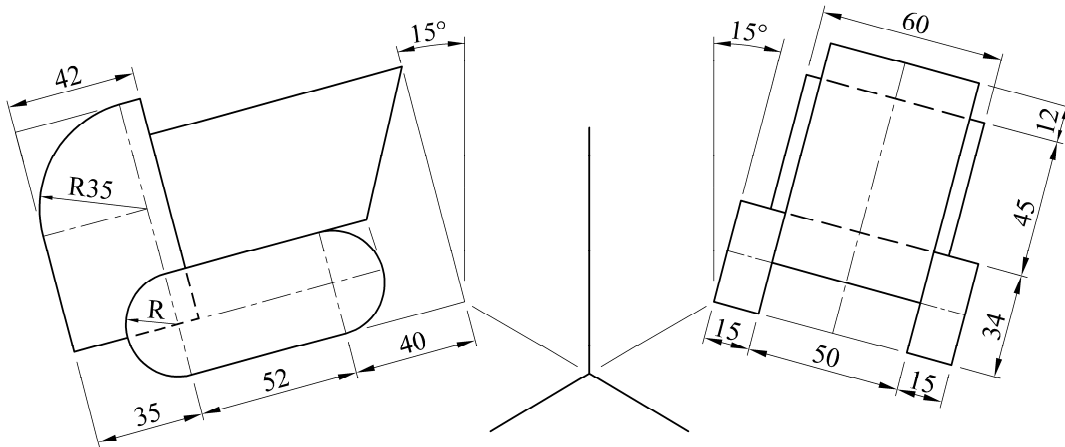
(a)

- (i) Draw the axonometric axes as shown.
- (ii) Draw the given elevation inclined at 15° as shown.
- (iii) Draw the given end view inclined at 15° as shown.
- (iv) Draw the completed axonometric projection of the toy truck.



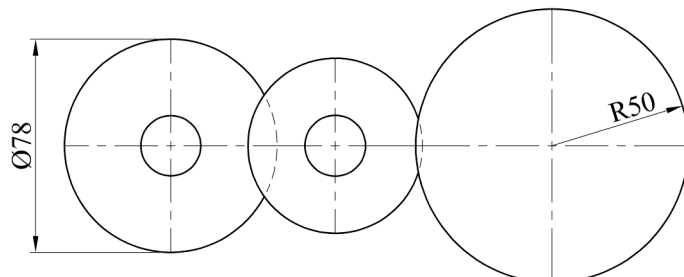
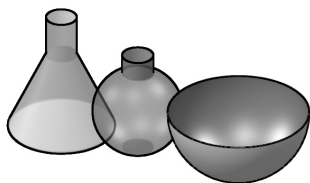
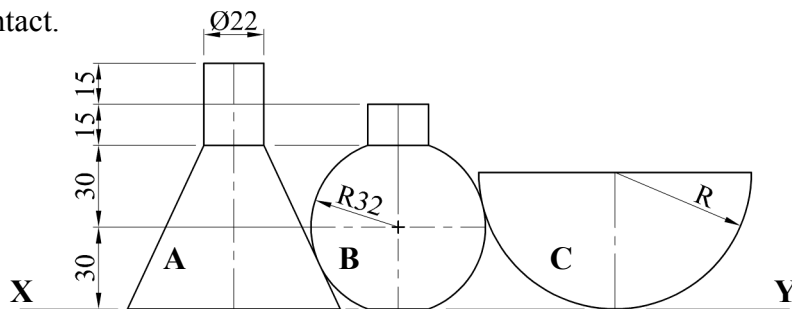
OR

- (b) Draw the isometric projection of the toy truck using the isometric scale method.



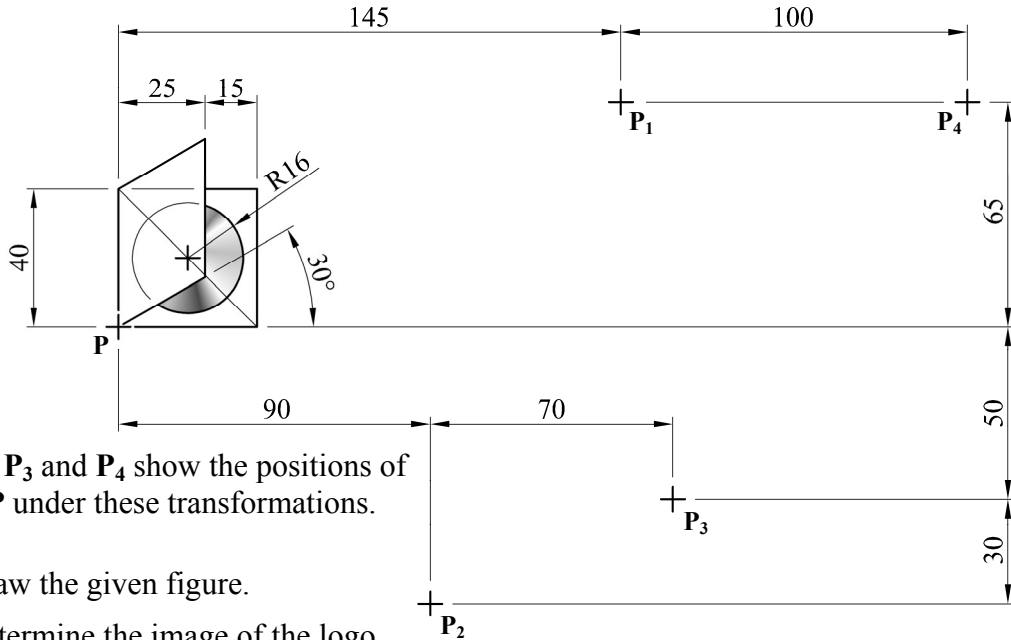
4. The elevation and plan of a set of science equipment are shown. A 3D graphic of the equipment is also shown.

- (a) Draw the given elevation and plan, showing all constructions.
- (b) Draw the development of the conical surface A.
- (c) Show all points of contact.



5. The figure shows the logo of a music app for a smartphone.
The logo is subject to transformations in the following order:

- Central Symmetry
- Translation
- Axial Symmetry
- Rotation clockwise through 90° .



P_1 , P_2 , P_3 and P_4 show the positions of point P under these transformations.

- (a) Draw the given figure.
(b) Determine the image of the logo under **each** of these transformations.

6. The figure shows a logo for an animal shelter.

The curve ABC is a parabola with vertex at B .

The curves DEF and GHF are identical to portions of the same parabola with vertices at E and H , respectively.

The curve $JKLM$ is an ellipse with focal points at N and P .

Draw the given design showing clearly all construction.

