



Coimisiún na Scrúduithe Stáit State Examinations Commission

JUNIOR CERTIFICATE EXAMINATION, 2006

SCIENCE (REVISED SYLLABUS) – HIGHER LEVEL

THURSDAY, 15 JUNE – MORNING, 9.30 to 11.30

INSTRUCTIONS

1. Write your **examination number** in the box provided on this page.
2. Answer **all** questions.
3. Answer the questions in the spaces provided in this booklet. If you require extra space, there is a blank page provided at the back of this booklet.

Centre Number

Examination Number

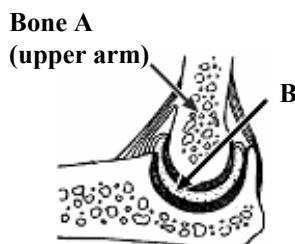
For examiner use only	
Section/Question	Mark
Biology	
Q.1 (52)	
Q.2 (39)	
Q.3 (39)	
Chemistry	
Q.4 (52)	
Q.5 (39)	
Q.6 (39)	
Physics	
Q.7 (52)	
Q.8 (39)	
Q.9 (39)	
Coursework	
Coursework A (60)	
Coursework B (150)	
Total (600)	
Grade	

Biology

Question 1

(52)

- (a) The diagram shows the structure of an elbow.
Name **bone A** and identify the **type** of moveable **joint B**.




Name of bone A _____

Type of joint B _____

- (b) **Decomposers** are living things that release useful materials, from the waste products of plants and animals and from dead plants and animals, for reuse by living organisms. Name **two kinds of decomposers** found in the **soil**.

Names _____

- (c) Water vapour evaporates from cells in the leaves of plants and exits the leaves by way of tiny pores in their leaves. What is this **process** called? How would you **test** the drops of liquid inside the plastic bag covering the shoot of the plant shown in the diagram to **show that the drops are water**?



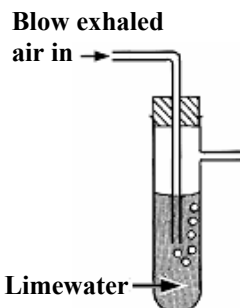
Name of process _____

Test for water _____

- (d) The diagram is of an apparatus used to show that **exhaled air contains carbon dioxide**.

When performing this experiment **a control is required** to show that inhaled air contains **less** carbon dioxide than exhaled air.

Describe, using a labelled diagram, a suitable control procedure.

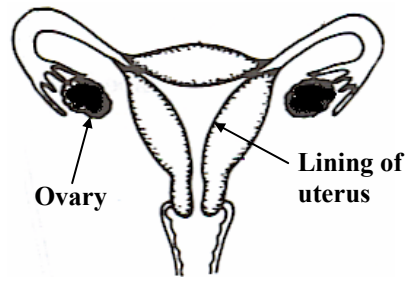


Labelled diagram

For
examiner
use only

(1) (2)

(e) The diagram shows the female reproductive system during the **fertile period** of the menstrual cycle. What happens in the ovary during this time? What happens to the lining of the uterus during this time?



What happens in the ovary? _____

What happens to the lining of the uterus? _____

(f) Eye colour, hair texture and many other human characteristics are controlled by **genes**. Name the **structures** in the **nuclei** of our cells where **genes** are located. Name the **substance** that genes are made of.

Name of structures _____


Name of substance _____

(g) Waste management includes: composting, incineration, landfill and recycling. Pick **one** of the underlined methods of managing waste and say **how it works** and give one advantage **or** disadvantage of using the method that you have selected.

How it works _____

Advantage/Disadvantage _____

(h) The plant shown in the diagram was left in total darkness overnight and then exposed to strong sunlight for four hours. The **leaf** with the foil was removed from the plant and **tested for starch**. Clearly state the **result** you would expect from this test? What conclusion can be drawn?



Result _____

Conclusion _____

(7 × 6 + 1 × 10)

For
examiner
use only

(1) (2)

Question 2

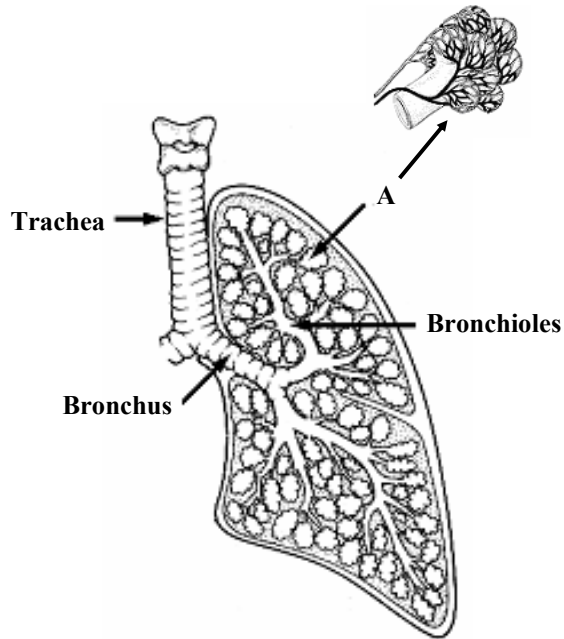
(39)

For
examiner
use only

(a) The diagram shows the structure of a human lung. Air passes in and out of the lungs, via the trachea, bronchi and bronchioles. *Gaseous exchange* takes place in the structures labelled A.

(i) Name *structure A*. (3)

(ii) How does *gaseous exchange* take place in the structures labelled A? (6)



(b) Blood is a liquid tissue. The diagram shows blood viewed through a microscope.

(i) Name **any two** components of blood shown in the diagram. (6)

Component 1 _____

Component 2 _____



(ii) Give the *function* of **each** of the components of blood you have named. (6)

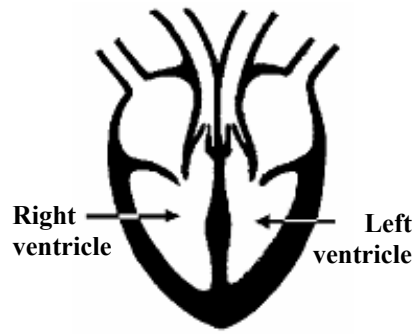
Function of 1 _____

Function of 2 _____

(1) (2)

(iii) The diagram shows the human heart.

Why has the left ventricle got a **thicker wall** than the right ventricle? (3)



For
examiner
use only

(1) (2)

(c) The diagram shows a person's **pulse rate** being taken.

(i) **What** causes a **person's pulse**? (3)

(ii) **How** is a person's **pulse rate measured** using this method? (6)



(iii) An athlete's resting pulse rate is 58. After 10 minutes strenuous exercise their pulse rate was 120. After resting for 5 minutes their pulse rate reduced to 63. **Clearly account for the rise and fall in pulse rate** experienced by the athlete. (6)

Question 3

(39)

For
examiner
use only

(a) This nutritional information was given on a packet of wheat bran. Wheat bran is used with breakfast cereals and is added to brown bread.

<u>Nutritional Information per 100 g</u>	
Energy	872 kJ / 206 kcal
Protein	15 g
Carbohydrate	26.8 g
(of which sugars)	3.8 g
Fat	2.5 g
(of which saturates)	0.5 g
Fibre	36.5 g
Sodium	0.028 g

(1) (2)

(i) Select **any two nutrients** from the list given and say what **role** each one has in maintaining health.

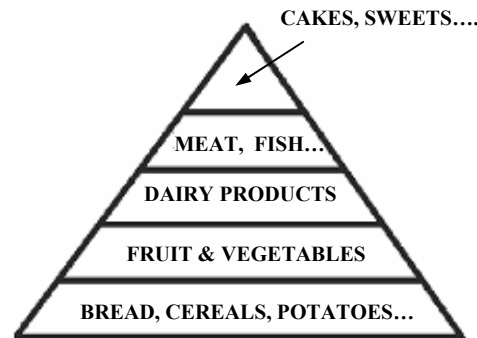
(6)

Nutrient 1 _____ **Role of 1** _____
Nutrient 2 _____ **Role of 2** _____

(ii) The diagram shows a food pyramid.

Explain how to use a food pyramid to plan a healthy diet.

(6)



(iii) Tests were carried out on three foods by a pupil in a school laboratory.

The results of these tests are given in the table.

A plus (+) sign means a positive result to a test.

A minus (-) sign means a negative result to a test.

Food Tested	Food Tests			
	Starch	Reducing sugar	Protein	Fat
Food A	+	-	-	+
Food B	-	-	+	+
Food C	+	-	+	+

Which **one** of the foods, **A**, **B** or **C** would most likely be cheese, meat, or fish? _____

(3)

Which **one** of the foods, **A**, **B** or **C** would most likely be crisps, or chips? _____

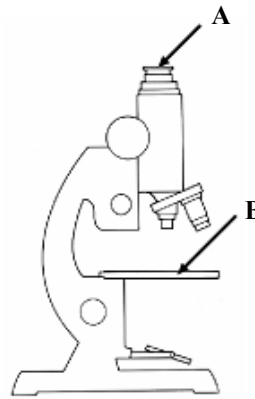
(3)

(b) The diagram shows a laboratory microscope.

(i) What are the **functions** of parts labelled **A and B**? (6)

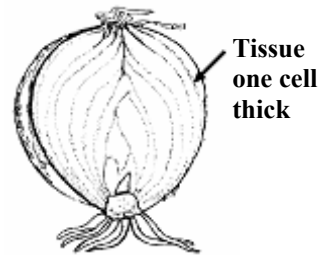
Function of A _____

Function of B _____



(ii) Onion epidermis is a tissue only one cell thick. It is used in school laboratories on microscope slides to investigate plant cell structure using a microscope.

Describe how to **prepare a microscope slide** from a plant tissue. (6)



(iii) Draw a **labelled diagram**, in the box provided, of a **plant cell**. (9)

Labelled diagram

For
examiner
use only

(1) (2)

Chemistry

Question 4

(52)

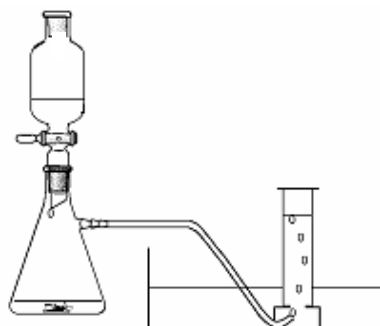
For
examiner
use only

(1) (2)

(a) Define the term '*isotope*'. _____

(b) In 1774 Joseph Priestley, an English chemist, discovered oxygen.


Name the **two chemicals** that you reacted together to **prepare oxygen** in the school laboratory. One of the chemicals acted as a **catalyst**.



Names of chemicals _____

Which one of the two chemicals used was the **catalyst**?

(c)



Fossil fuels are burnt to provide energy to generate electricity.

Give the **name** *or* **formula** of a compound of **sulfur** formed when a sulfur containing fossil fuel **burns in air**.

Name *or* **formula** _____

Acid rain is formed when this sulfur compound dissolves in and reacts with water in the atmosphere. Describe the **effect of acid rain** on limestone.

Effect on limestone _____

(d) How would you show that **water contains dissolved solids**?

(e) Reactivity tests were carried out on calcium, copper, magnesium and zinc in four test tubes containing an acid.

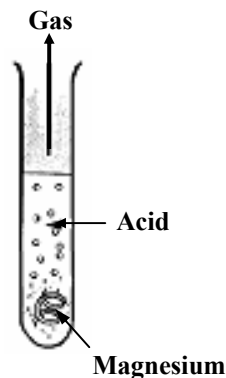
The test carried out using magnesium is shown.

State **one thing** you would do **to make the tests fair**.

List the **four metals in order of reactivity with the acid**, starting with the **most reactive**.

State one thing _____

Metals in order of reactivity _____



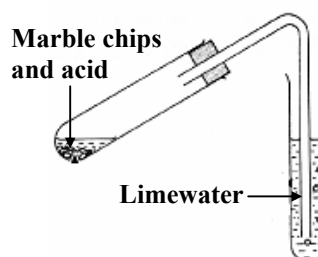
For
examiner
use only

(1) | (2)

(f) Niels Bohr received the Nobel Prize for physics in 1922 for his model of the electronic structure of the atom. Potassium has an atomic number of 19. Give the arrangement of the electrons in an atom of potassium.



(g) Carbon dioxide turns limewater milky. Complete the **chemical equation** for the reaction of carbon dioxide with limewater.



(h) The diagram shows the electrolysis of water.

Why is **some acid added** to the water?

Why? _____

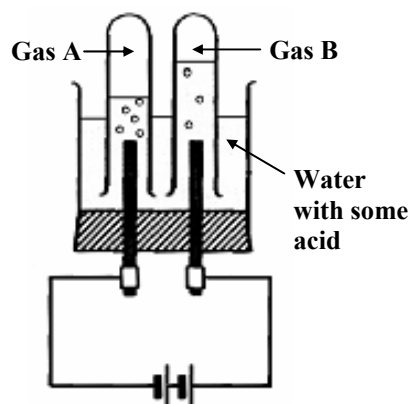
Give a **test** for **gas A**.

Test _____

The volume of gas **A** is twice that of gas **B**.

What does this tell us about the composition of water?

What? _____



(7 × 6 + 1 × 10)

Question 5

(39)

For
examiner
use only

(a) The pieces of laboratory equipment shown, together with some other items, were used to *prepare a sample of sodium chloride*.

(i) Name item **A** or item **B** (3)

A _____ or **B** _____

(ii) There were 25 cm³ volumes of base used in this experiment. Describe how the piece of equipment **A** was used to *measure the volume of acid* required to neutralise this amount of base. (6)

(iii) Name a *suitable acid* and name a *suitable base* for the preparation of sodium chloride by this method. (6)

Acid _____ **Base** _____

(iv) Write a *chemical equation* for the reaction between the *acid* and the *base* that you have named. (6)

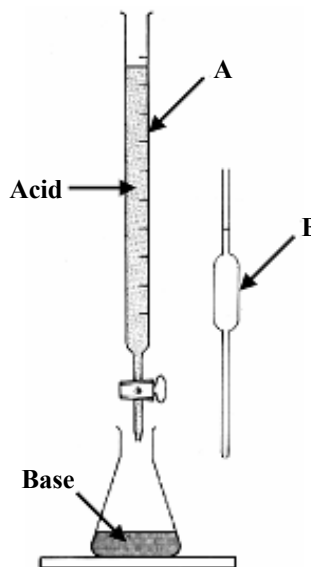
(b) Different plastics have different properties.

The dust pan and brush set shown is made from *two different plastics*. The bristles are made of *type A* and the other parts are made of *type B* plastic.

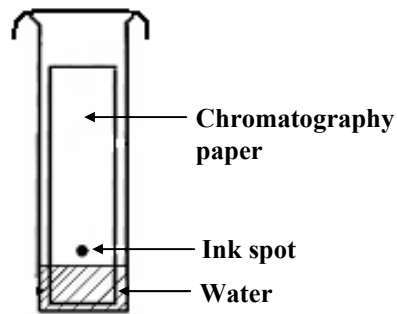
Give *one property* of *type A* and *one property* of *type B* plastic that make them suitable for their use in this product. (6)

Property of type A _____

Property of type B _____



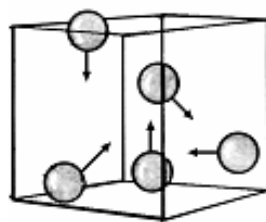
(c) A spot of water-soluble ink was put on a piece of chromatography paper and set up as shown in the diagram. The ink used was a *mixture* of different coloured dyes.



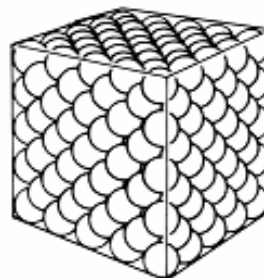
(i) What happens to the ink spot as the water moves up the paper? (3)

(ii) What would happen to a spot of water-soluble ink consisting of a *single coloured dye* if it were used in the above experiment? (3)

(d) Study the diagram carefully. It *shows the ways that the particles of gases and solids occupy space*.



Particles of a gas



Particles of a solid

The particles of *gas* have *lots of space* and *move randomly* at high speeds in three dimensions and *collide* with each other and with their container.

The arrows represent the velocities of the gas particles.

The particles of a *solid* are *packed closely together* and *cannot move around* but they can *vibrate*.

Give *one property of a gas* and *one property of a solid*, that you have observed, and is consistent with (matches) this micro-view of these states of matter. (6)

One property of a gas _____

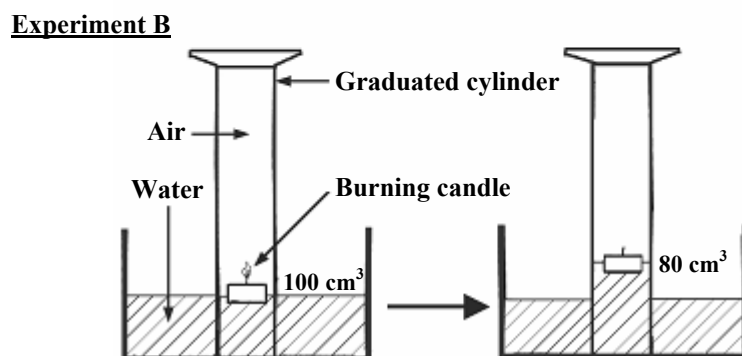
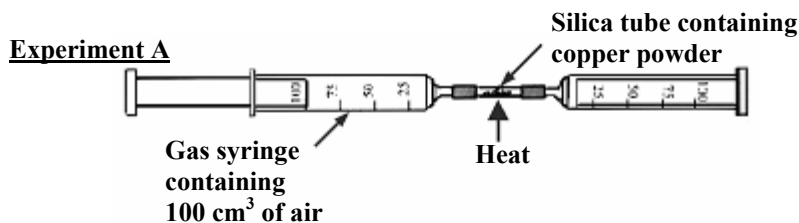
One property of a solid _____

Question 6

(39)

For
examiner
use only

- (a) The composition of air can be investigated in different ways.
Two experiments are shown in the diagram.



In **Experiment A** the air was pushed repeatedly over the heated copper powder and only 79 cm³ of gas remained at the end of the experiment.

- (i) Why is it necessary to let the apparatus cool down before measuring the volume of the remaining gas? (3)

- (ii) Why did the volume of gas decrease and then remain steady? (3)

- (iii) What is the remaining gas mainly composed of? (3)

- (iv) Experiment **B** is less accurate than Experiment **A**.
Give a reason why this is so. (6)

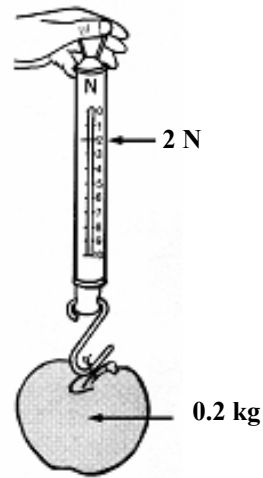
Physics

Question 7

(52)

(a) A pupil measured the **weight** of an apple of **mass** 0.2 kg using a spring balance and got a reading of 2 N.

Distinguish between **weight** and **mass**.




For
examiner
use only

(1) (2)

(b) How are **echoes** produced?

(c) A girl of mass 60 kg (weight 600 N) climbed a 6 m high stairs in 15 seconds.

Calculate the **work** she did and the average **power** she developed while climbing the stairs.



Work _____

Power _____

(d) What is **refraction** of light?

Give an everyday example of an effect caused by refraction.

What? _____

Example _____

(e) Define **temperature** and give a **unit** used to express temperature measurements.



Definition _____

Unit _____

(f) Explain, clearly, the **safety role** of **fuses** in household electrical circuits.

(g) Name the mode of **heat transfer** from the hot liquid, through the **spoon**, to the hand.

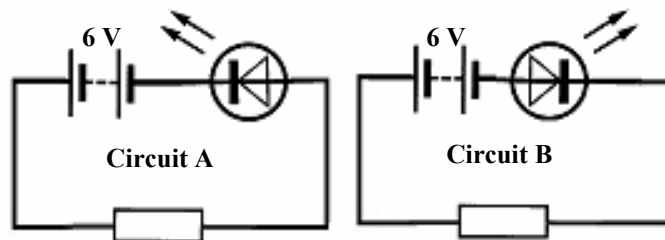
Name _____

Heat moves in liquids by convection. Give **one difference** between convection and the way heat moves along the spoon.



Difference _____

(h) A pupil carried out an investigation into **the effect of a diode on d.c. and on a.c.** circuits using an LED. The following circuits were initially set up.



What is **observed** in circuit **A** and in circuit **B**?

Circuit A _____

Circuit B _____

When the batteries in circuits **A** and **B** were replaced by 6 V a.c. supplies the LEDs glowed dimly in both circuits. Explain this **observation**.

Explanation _____

(7 × 6 + 1 × 10)

Question 8

(39)

For
examiner
use only

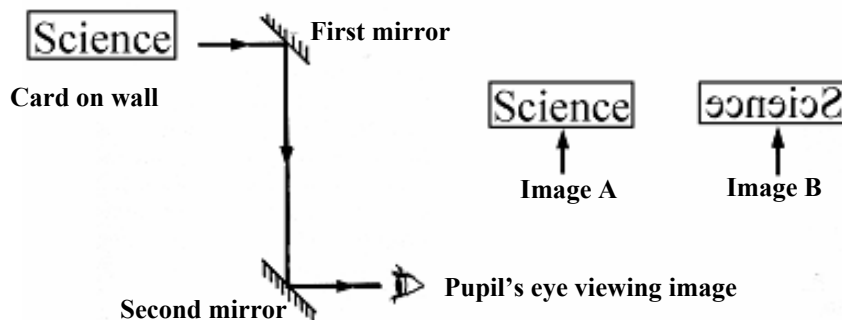
(a) (i) Why is the word **Ambulance** painted in reverse on the front of many ambulances? (3)

Why? _____



(1) (2)

(ii) A pupil made a *simple periscope* using two plane (flat) mirrors. The mirrors were arranged as shown in the diagram. The pupil looked through the periscope at the word 'Science' written on a card pinned to the laboratory wall.



Did the pupil see **image A** or **image B** when she looked through the periscope? Give a *reason* for your answer. (9)

Image? _____

Reason _____

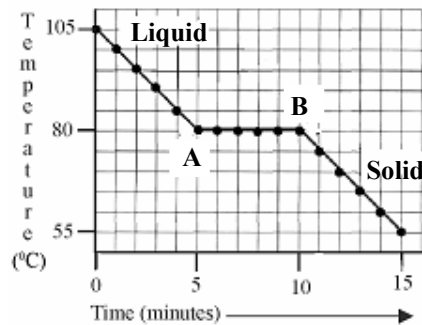
(b) Describe an experiment to show the *expansion of water* when it *freezes*. You may include a labelled diagram if you wish. (9)

Optional labelled diagram

(c) The graph is a **cooling curve**. The substance used in this experiment was naphthalene. Naphthalene has a melting point of 80 °C. The rate of heat loss was constant throughout the experiment.

(1) (2)

(i) What is **happening** to the naphthalene between points **A** and **B** on the graph? (3)



(ii) What is the **heat loss**, between points **A** and **B**, on the curve called? (3)

(d) In Ireland **90% of electricity** is generated **by burning fossil fuels** compared to other European countries who have an average of 50% use of fossil fuels and a 30% use of fossil fuels in the USA.

(i) List **two disadvantages**, excluding acid rain, of this heavy reliance on fossil fuels for the production of electricity. (6)

Disadvantage one _____

Disadvantage two _____

(ii) Suggest **two alternative sources** of energy for the generation of electricity in Ireland. (6)

Source one _____

Source two _____

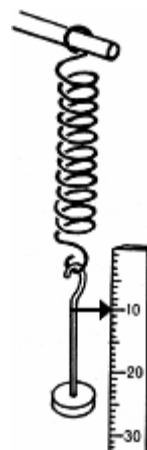
Question 9

(39)

For
examiner
use only

- (a) Robert Hooke (1635-1703) made a number of discoveries including the effect of force on elastic bodies now known as Hooke's law. *State Hooke's law.* (6)

Hooke's law _____



A student was given a box of identical springs and asked to analyse them so that they could be used as newton meters.

The student performed an experiment, using the apparatus shown in the diagram, on one of the springs.

In the experiment the student measured the increase in length of the spring caused by a number of weights. The spring was tested to destruction (that is weights were added until the spring was damaged).

The data from the experiment is given in the table.

Weight (N)	0.0	0.4	0.8	1.2	1.6	2.0	2.4
Extension (cm)	0.0	2.0	4.0	6.0	8.0	8.5	8.6

- (i) Plot a *graph of extension* (increase in length) *against weight* (x-axis) in the grid provided on the right. (9)

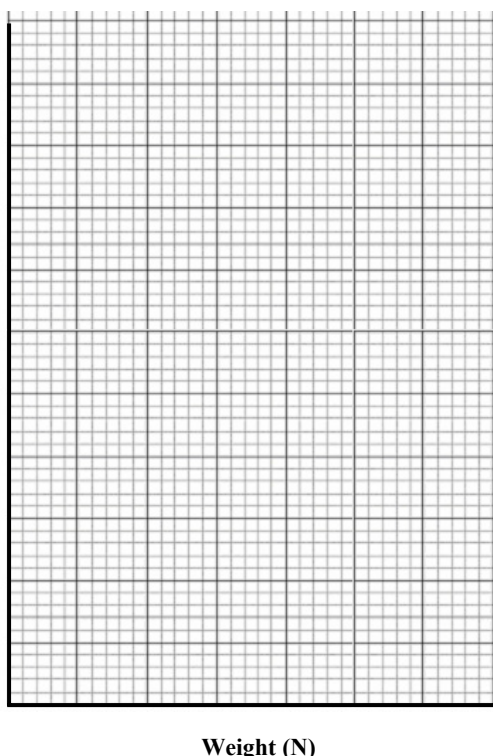
Extension (cm)

- (ii) Use the graph to find the *weight* that would produce an *extension* of 5 cm in the spring. (3)

Weight _____

- (iii) Study your graph carefully. The spring obeys Hooke's law for the earlier extensions and then when the spring becomes damaged it does not appear to do so.


Estimate, from your graph, *the weight after the addition of which the law seems no longer to apply.* (3)



(1) (2)

(b) Components, e.g. bulbs, in electrical circuits can be connected in *series* or in *parallel*.

- (i) It is noticed that, when one headlight fails (blows) in a car, the second remains lighting.



State *the way the headlights are connected* and give a *reason* why this mode of connection is used. (6)

State the way _____

Reason _____

- (ii) All of the bulbs go out in an old set of Christmas tree lights, when one of bulbs fails (blows). In *what way are the bulbs connected* in this set of lights?



Explain why, when *one bulb blows*, *they all go out*. (6)

What way? _____

Explain _____

- (iii) Calculate the *resistance of the filament* of a car headlamp when 12 V produces a current of 5 A in it. In what unit is resistance measured? (6)

Resistance _____

Unit of resistance _____

For
examiner
use only

(1) | (2)

